













## UNITS

KS1 – 2022 Paper – Reasoning

1.

<b>15</b>	<p>Measurements matched to correct units as shown:</p> <table border="0"><thead><tr><th data-bbox="277 478 634 510">measurement</th><th data-bbox="711 478 792 510">unit</th></tr></thead><tbody><tr><td data-bbox="277 541 634 611"> the <b>length</b> of a pencil</td><td data-bbox="711 541 792 611">kg</td></tr><tr><td data-bbox="277 642 634 711"> the <b>mass</b> of a bag of potatoes</td><td data-bbox="711 642 792 711">°C</td></tr><tr><td data-bbox="277 743 634 812"> the <b>capacity</b> of a cup</td><td data-bbox="711 743 792 812">cm</td></tr><tr><td data-bbox="277 844 634 913"> the <b>temperature</b> outside</td><td data-bbox="711 844 792 913">ml</td></tr></tbody></table>	measurement	unit	 the <b>length</b> of a pencil	kg	 the <b>mass</b> of a bag of potatoes	°C	 the <b>capacity</b> of a cup	cm	 the <b>temperature</b> outside	ml	<b>1m</b> <p>All the measurements must be correctly matched for the award of the mark.</p> <p><b>Do not</b> award the mark if the measurement is matched to more than one unit.</p> <p>Ignore additional lines drawn from 'the length of a pencil'.</p>
measurement	unit											
 the <b>length</b> of a pencil	kg											
 the <b>mass</b> of a bag of potatoes	°C											
 the <b>capacity</b> of a cup	cm											
 the <b>temperature</b> outside	ml											